

Time: 10 Minutes	Paper Math 7 (T-1)	Total Marks: 10
5th Month, 1st Week, 2nd Day		Exercise 4.1 Q # (2)

☆ Answer the following questions:

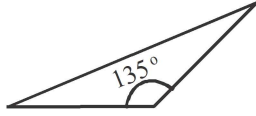
درج ذیل سوالات کے جواب دیں۔

Q.1. Identify the triangles with respect to angles.

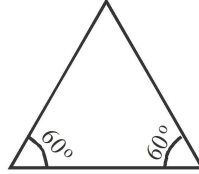
(2x5=10)

زاویوں کے لحاظ سے مثلثوں کی شناخت کریں۔

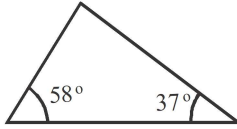
(i)



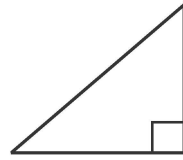
(ii)



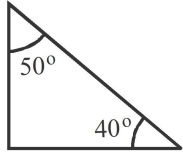
(iii)



(iv)



(v)



Time: 10 Minutes	Paper Math 7 (T-1)	Total Marks: 10
5th Month, 1st Week, 2nd Day		Exercise 4.1 Q # (2)

☆ Answer the following questions:

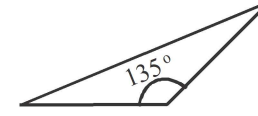
درج ذیل سوالات کے جواب دیں۔

Q.1. Identify the triangles with respect to angles.

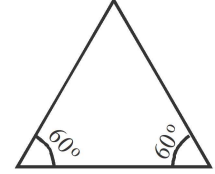
(2x5=10)

زاویوں کے لحاظ سے مثلثوں کی شناخت کریں۔

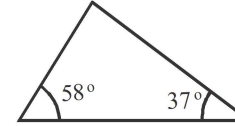
(i)



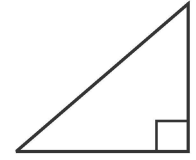
(ii)



(iii)



(iv)



(v)

